

## Place Value Abacus

Thousands (TH)	Hundreds (H)	Tens (T)	Units (U)



## QUIZ TIME



Which value is bigger - Tens or Hundreds?

Which is the smallest value?

Using some counters, can you show what the number 35 looks like on the abacus?

Using different coloured counters or paper squares, can you show what 134 looks like on the abacus in one colour and what 237 looks like in another colour? Which number is bigger? Why?

Compare the following numbers and say which is bigger:

2175 or 2164?

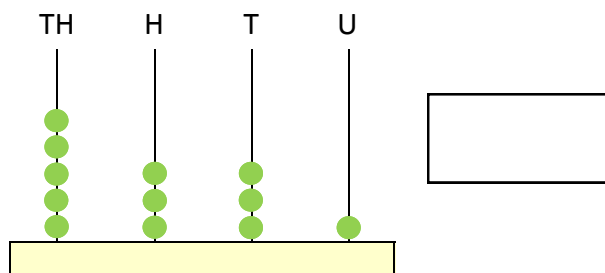
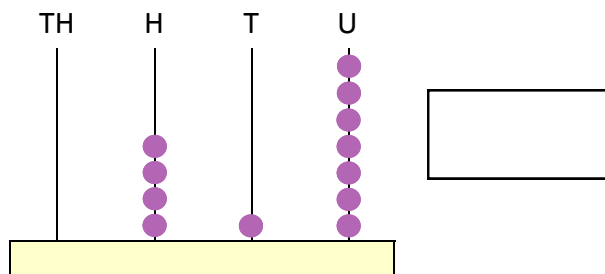
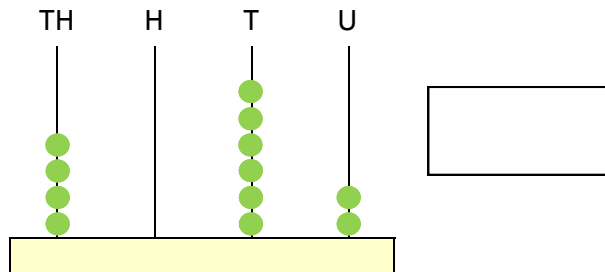
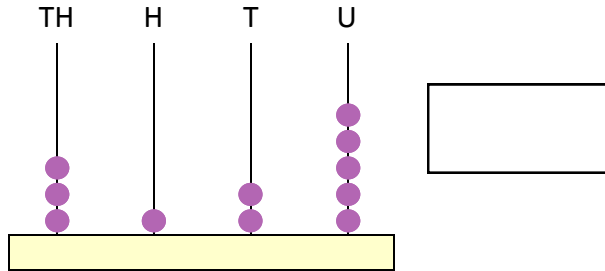
413 or 271?

Say if the following statement is true or false:

362 is bigger than 1123 because it has more hundred and tens.

## Extra Activities

Write the numbers shown on the abacus.



Write the value of the underlined digit.

<u>2</u> 47	Four tens	7 <u>8</u> 54	
16 <u>8</u>		<u>3</u> 47	
<u>6</u> 841		17 <u>7</u>	
54 <u>9</u>		<u>9</u> 41	
32 <u>4</u> 4		<u>2</u> 684	

Write the words in number.

Five tens and three units		Eight hundred one ten and six units	
Two hundred four tens and eight units		Three thousand two tens and four units	
One thousand five hundred and nine units		Nine hundred and six tens	
Eight hundred two tens and one unit		Seven thousand and two hundreds	

Write the numbers in order of size.

	Smallest				Largest
21, 15, 87, 54, 19					
129, 58, 67, 145, 35					
1245, 475, 625, 987, 574					
325, 391, 478, 357, 596					