






The Safari

The safari park ranger went out on patrol and recorded the animals he saw.



Sort the information out into a tally chart.

Animal	Tally	Frequency
		
		
		
		
		
Total		

Quiz

How many tigers did he see?

Which animal did he spot the most of?

How many animals did he see altogether?
